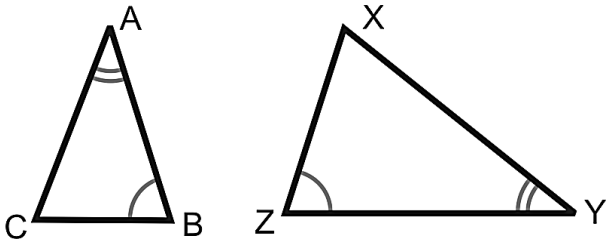
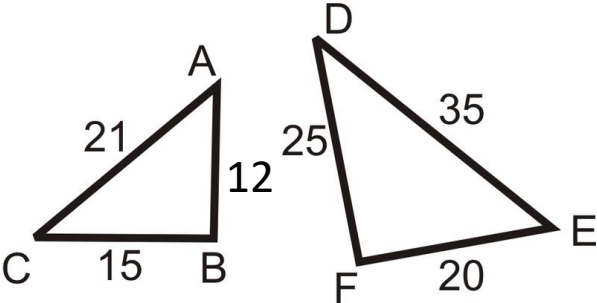
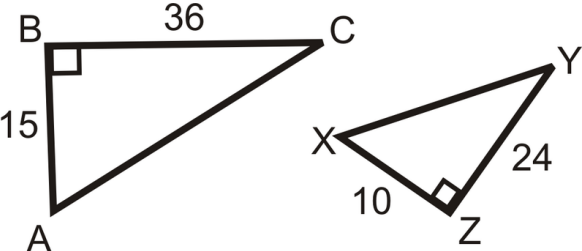


**Learning Objective(s)** \_\_\_\_\_:

<div><b>Main Ideas/ Questions</b></div> <div>Similar Triangles Characteristics</div>	<div><b>Notes</b></div> <div><b>Similar Triangles</b> – Two triangles that ALL 3 _____ are CONGRUENT and ALL 3 corresponding sides are _____!</div>
<div>3 Ways to Prove Triangles are Similar</div>	<div></div>
	<div></div>
	<div></div>

Main Ideas/  
Questions

Examples

Notes

Are these figures similar? If so, how and write a similarity statement.

